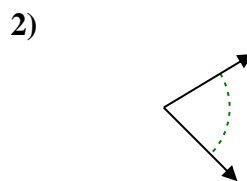

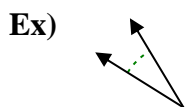




Determine if the angle shown is acute, obtuse, right or straight.

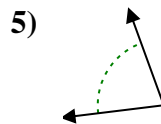
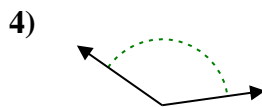
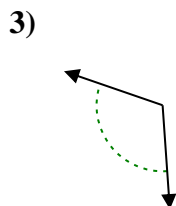
Answers



Ex. acute

1. _____

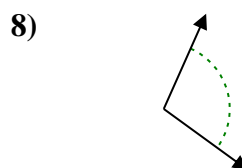
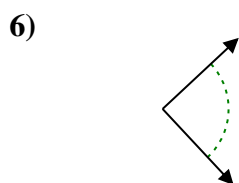
2. _____



3. _____

4. _____

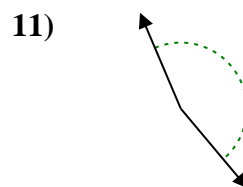
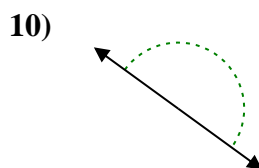
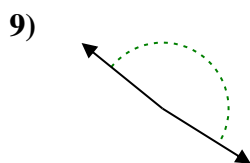
5. _____



6. _____

7. _____

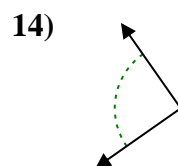
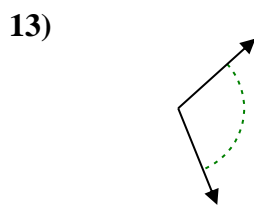
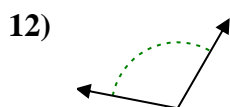
8. _____



9. _____

10. _____

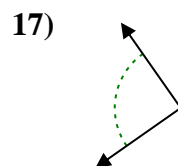
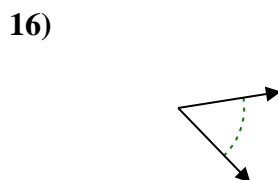
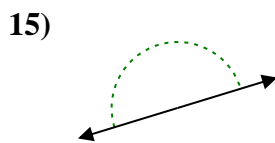
11. _____



12. _____

13. _____

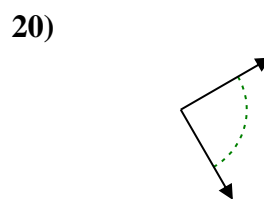
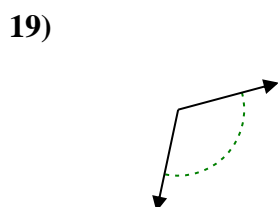
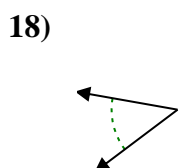
14. _____



15. _____

16. _____

17. _____



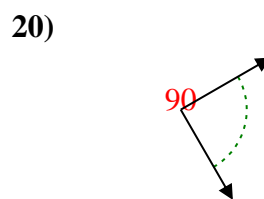
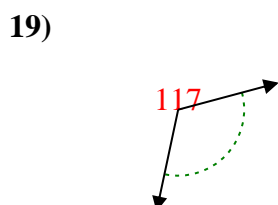
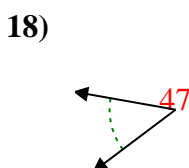
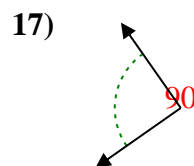
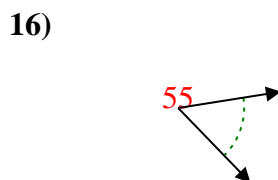
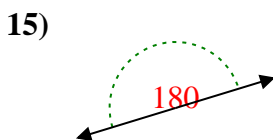
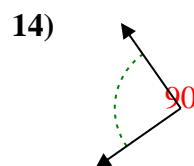
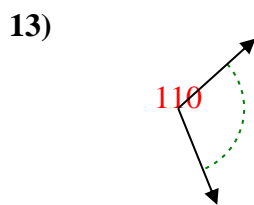
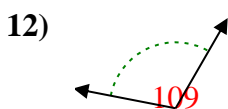
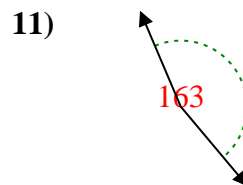
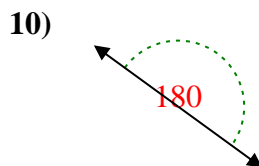
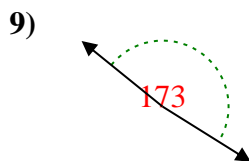
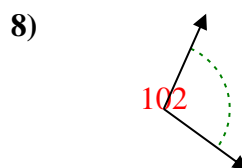
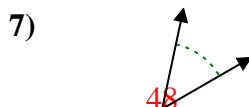
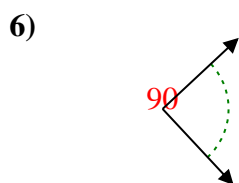
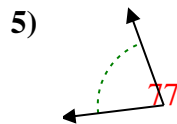
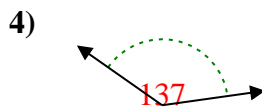
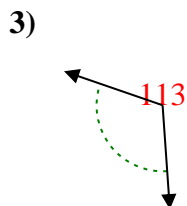
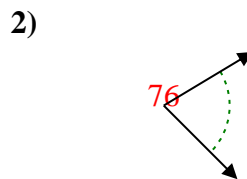
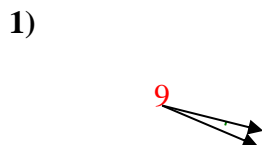
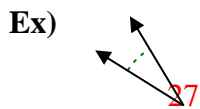
18. _____

19. _____

20. _____



Determine if the angle shown is acute, obtuse, right or straight.



Answers

Ex. acute

1. acute

2. acute

3. obtuse

4. obtuse

5. acute

6. right

7. acute

8. obtuse

9. obtuse

10. straight

11. obtuse

12. obtuse

13. obtuse

14. right

15. straight

16. acute

17. right

18. acute

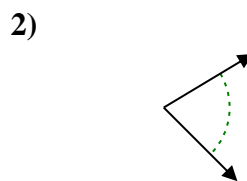

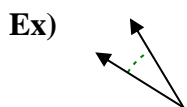
19. obtuse

20. right



Determine if the angle shown is acute, obtuse, right or straight.

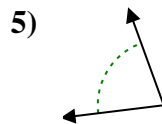
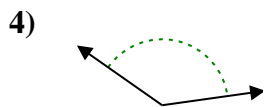
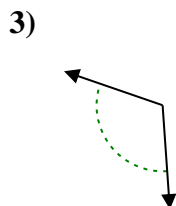
Answers



Ex. acute

1. _____

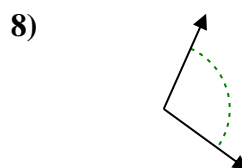
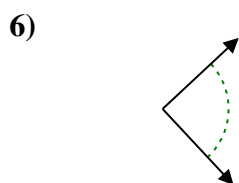
2. _____



3. _____

4. _____

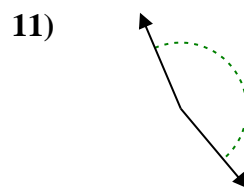
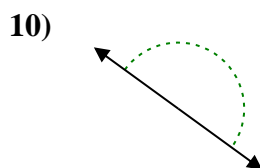
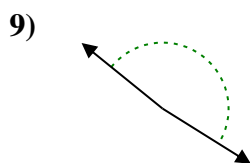
5. _____



6. _____

7. _____

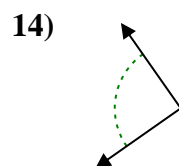
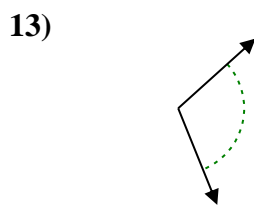
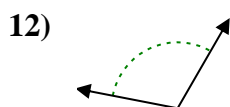
8. _____



9. _____

10. _____

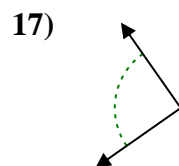
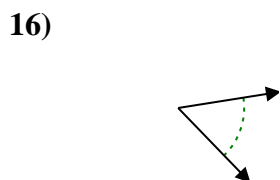
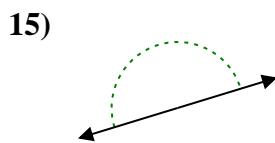
11. _____



12. _____

13. _____

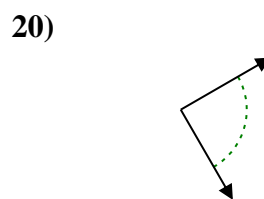
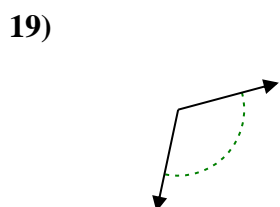
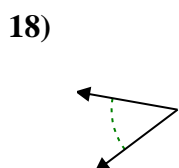
14. _____



15. _____

16. _____

17. _____



18. _____

19. _____

20. _____